



**MPVM:GANGA GURUKULAM
HOLIDAY HOMEWORK**



Class - 5

List of subjects:

- ❖ *English*
- ❖ *Hindi*
- ❖ *Mathematics*
- ❖ *Science*
- ❖ *SST*
- ❖ *Computer*
- ❖ *Sanskrit*



MPVM:GANGA GURUKULAM

.....
Gaddopur, Phaphamau, Prayagaraj

WEBSITE – www.mpvmgg.com

English

(Do on a Separate Sheet)

1. Read the passage given below and find the following-

Once an ant fell into a stream. A dove was passing by. He saw the ant in danger, so he dropped a leaf into the water. The ant saw the leaf and climbed on it. The dove picked up the leaf with the ant on it and flew to the bank of the stream. The ant thanked the dove for saving her life. A few days later, a hunter came to the forest. He saw the dove on the tree. The hunter aimed his gun to shoot at the dove. The ant saw this. She quickly climbed up the hunter's leg and bit him. The hunter jumped and missed the aim. The dove heard the gun shot and flew away. Later the dove met the ant. The dove thanked the ant for her help.

a) Antonym of sooner _____, picked _____

b) Synonym of jungle _____

c) Any two verbs _____

d) Flew is the past tense of _____

2) Complete the puzzle with the help of given clues-

* A small river - - - eam

* To shout loudly - - - eam

* You see it while you are asleep - - - eam

* It forms on the top of a milk - - - eam

* A number of players on one side - - eam

3. Write a report on the story read by you from any of these books (Panchatantra by Vishnu Sharma , Treasure Island by Robert Louis Stevenson, Harry Potter by J.K Rowling) The guidelines for writing the report is given below – (Do it on a separate sheet of paper)

Story Report

Name of the story-

Author's name-

Major Characters-

Summary of the story in your own words-



4. It was a beautiful Sunday morning----- (Complete the story with your imaginations in about 80 to 100 words) (Do it on a separate sheet of paper)

5. Prepare a dictionary having three words of each alphabet (new words with at least six letters) with meaning to enhance the vocabulary. Cover it with a beautiful cover and put a bookmark in it with a moral value written on bookmark

6.

Abstract nouns are words that you can't see, touch or hear. Circle all the abstract nouns below and put all the words into the correct glass:

happy table key dog love sad
lemon apple beauty hate honesty
relaxation plug silence mat glove



7. Fill in the blanks with ie or ei to complete the spellings of each word –

- a) ch - - f b) anc - - ent c) n - - ce d) court - - r
e) th - - f f) bel - - ve g) n - - ghbour h) gu - - t
i) fr - - nd j) Sc - - ntist k) rec - - ve l) c - - ling

8. Fill in the blanks with the correct collective nouns from the word bank given below. Use each word only once.

(dictionary , class , team , bunch , flock , bundle , bouquet , cluster , swarm , band)

- a) a _____ of sheep b) a _____ of stars
c) a _____ of musicians d) a _____ of sticks
e) a _____ of students f) a _____ of words
g) a _____ of bees h) a _____ of flowers
i) a _____ of grapes j) a _____ of players

9. Write and Learn all the work of English Lit. and Lang. done in your book and notebook. Learn the poem 'God Save the Beetle' given on pg no 15.

Hindi

1- अपनी पाठ्यपुस्तक से कविता ' नव इतिहास रचाएँगे' याद करो।

2- हिन्दी साहित्य और व्याकरण कॉपी में कराया गया सारा कार्य रफ कॉपी में लिखकर याद करो।

3-' मेरे जीवन का लक्ष्य ' विषय पर एक अनुच्छेद एक अलग पृष्ठ पर लिखो।

4-उचित संज्ञा शब्द लिखो-

व्यक्तियों के नाम i. ii. iii.	समोईपर की चीजें i. ii. iii.	पहाड़ों के नाम i. ii. iii.	नदियों के नाम i. ii. iii.
ज्योहारों के नाम i. ii. iii.	देशों के नाम i. ii. iii.	घसबों के नाम i. ii. iii.	गहनों के नाम i. ii. iii.

5-इन चित्रों के दो- दो पर्यायवाची लिखो-



6- उचित विलोम शब्द द्वारा खाली जगह भरो-

क- हमें सदा सत्य बोलना चाहिए _____ कभी नहीं ।

ख-जीवन और _____ सिक्के के दो पहलू हैं ।

ग-सब से प्रेम करो _____ नहीं।

घ- न्याय का मार्ग कठिन है _____ का नहीं ।

ड-अच्छाई से पुण्य और _____ के पाप मिलता ह

7-इन शब्दों के लिए एक शब्द छाँट कर लिखो-

क- जो दिन में एक बार हो- _____

ख- जो डरता ना हो - _____

ग-जो शाक -सब्जी खाता हो - _____

घ-जो लोहे की सामान बनाता है- _____

घ- जो काम से जी चुराता है- _____

8-सुलझाओ-

नीचे दी गई वर्ग पहेली में सही वर्ण लिखकर संज्ञा शब्द पूरे कीजिए—

संकेत

1. एक फूल का नाम
2. एक प्रदेश की राजधानी
3. एक छोटा मुलायम जानवर
4. एक क्रिया का नाम, जो बच्चे करते हैं।

1.	क			
		3.		
2.	ल	ख		ऊ
4.	श			त

9- उचित क्रिया द्वारा खाली जगह भरो-

(क) बादल छाए और वर्षा।

(ख) जनता अब चुप नहीं।

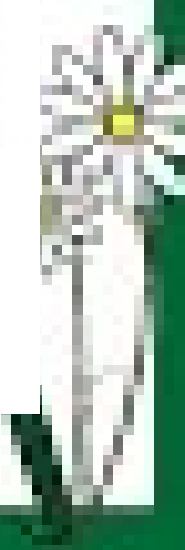
(ग) घृणा को प्रेम से जीता जा।

(घ) आजकल सोना बहुत महँगा हो।

10-इनके समूहवाचक शब्द लिखो-

			
.....	अंगूर का गुच्छा

11- पंचतंत्र कथा जातक कथाएँ में से 2 कहानियाँ पढ़ कर, उनमें से जो सा पात्र आपको सबसे ज्यादा पसंद आया हो , उसके विषय में पांच पंक्तियाँ (चरित्रचित्रण)लिखो।



Maths

Q1.

Special Number	
The special number is <div style="font-size: 2em; font-weight: bold; text-align: center;">60,812</div>	The value of the digit 2 is _____ The value of the digit 1 is _____ The value of the digit 8 is _____ The value of the digit 0 is _____ The value of the digit 6 is _____
even odd	
Fill in the empty boxes on the number line.	
Write the number in expanded form.	
_____ + _____ + _____ + _____	
1,000 less than 60,812 is _____ 10,000 more than 60,812 is _____ 100 less than 60,812 is _____ 1 more than 60,812 is _____ 10,000 less than 60,812 is _____	Compare. <, >, or = 61,810 <input type="checkbox"/> 60,812 60,812 <input type="checkbox"/> 60,812 60,812 <input type="checkbox"/> 60,218 62,802 <input type="checkbox"/> 60,812

Q2.

1) Write the place value of the underlined digit under each of the numbers.

27, <u>5</u> 02	<u>7</u> 1,918	13 <u>2</u> ,825	7 <u>4</u> 9,327	28,1 <u>7</u> 6
500				
<u>5</u> 13,295	8 <u>3</u> 4,247	<u>3</u> 6,429	6 <u>2</u> 5,231	<u>9</u> 17,438

2) Write these numbers in expanded form.

$$13,459 = 10,000 + 3,000 + 400 + 50 + 9$$

$$35,916 =$$

$$132,756 =$$

$$849,018 =$$

3) Write these numbers in standard form.

$$10,000 + 3,000 + 500 + 80 + 2 = 13,582$$

$$80,000 + 7,000 + 600 + 90 + 5 =$$

$$100,000 + 40,000 + 9,000 + 400 + 50 + 3 =$$

$$200,000 + 60,000 + 800 + 70 + 4 =$$

$$600,000 + 9,000 + 400 + 90 =$$

4) Fill in the missing parts in these numbers

$$27,582 = \text{_____ thousands} \text{ _____ hundreds} \text{ _____ tens} \text{ _____ ones}$$

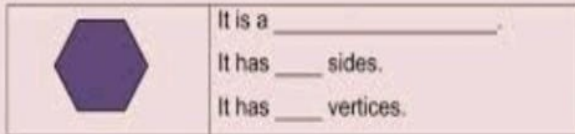
$$38,214 = \text{_____ thousands} \text{ _____ hundreds} \text{ _____ tens} \text{ _____ ones}$$

$$135,634 = \text{_____ thousands} \text{ _____ hundreds} \text{ _____ tens} \text{ _____ ones}$$

Q3.

Answer the questions based on the instruction given.

1. Look at the picture below.



2. Match the pictures and their properties.



•

•

It has 3 sides and 3 angles, all the angles are not right angles.



•

•

It has 5 vertices and 2 right angles.



•

•

It has 4 sides. All the angles are right angles.



•

•

It has 6 sides and 6 vertices.

3. Match the name of the shapes below with its properties.

It has 1 curved side and 1 straight side

•

•

Triangle

It has 5 straight sides and 5 vertices

•

•

Semicircle

It has 3 straight sides and 3 vertices

•

•

Pentagon

It has 10 straight sides and 10 vertices

•

•

Decagon

Q4. Make a chart showing Indian place value system and International place value system and colour it. (Use any number of your choice to show in the chart)

Q5. Find out the GOLD PRICE on the first day of the past 5 months.

a) Arrange the values in ascending order.

b) Find out the dates on which the price was maximum and minimum. Write the values also.

c) Find the sum of all the values.

Q6. Do all the exercises of Ch.1 Looking Back in the book itself.

Q7. Learn tables from 2 to 20 .Practice all the work done in the Maths book and notebook.

E V S S-St.

1. Make a globe by using a small ball and cutouts of Continents from an outline map of the world. Colour the ball with blue and paste all the continents on it. Label all the Continents and Oceans carefully.
2. Write the following information about your State –
 - i) Name and capital
 - ii) Size
 - iii) Population
 - iv) Neighbouring States
 - v) State flower
 - vi) State animal
 - vii) State bird
 - viii) Chief Minister
3. Write any four qualities of a good citizen.
4. Find out the name of trains connecting your city Prayagraj to the following metropolitan cities of India-

Cities	Trains
i) Delhi	i)
ii) Mumbai	ii)
iii) <u>Bangaluru</u>	iii)
5. Find the names of three extinct and three endangered animal species.
Draw, colour and label any one endangered and one extinct animal.
6. Learn all the Definitions ,Question- Answers and Give Reasons of Chapter-1 (Continents and Oceans).

Science

Q1. Find out the name of any two migratory birds or animals. Collect the following information about them -

- which place do they migrate
- reason for their migration
- draw/ paste the picture of that bird/ animal.

Q2. Prepare a healthy menu card for a week and write the importance of each component. Try not to repeat the dishes.




Q3.

Fill in the blanks.

- Food can be eaten in _____ or _____ form.
- _____ helps the body to fight diseases.
- A _____ contains all the nutrients such as fats, protein, vitamins, etc in correct amounts.
- Proteins are called _____ nutrients.

Q4. Make a model of the Human Skeletal system on a sheet with the help of different materials like cotton, straws, earbuds etc and label the parts neatly.

Q5.

Form of energy	example	picture
	fire, iron	
	light bulb, sun	
	battery, food, fossil fuels	

Q6. Fill in the blanks with correct answer-



1. When _____ happens, the water temperature in streams, rivers, lakes, or oceans changes.

2. _____ occurs when the atmosphere contains gases, dust, or fumes in harmful amounts.

3. When radiation goes into the land, air or water, it is called _____.

4. Too much use of electric lights in cities may cause _____.



Q7. Learn and write all the work done in the Science book and notebook.

Computer

(Do on a Separate Sheet)

1. Identify and name the following:-




1



2




3




4




5



6



7



8

2. Match the following correctly:-

Invention	Inventor
a) Abacus	(i) Charles Babbage
b) Napier's Bones	(ii) Howard H. Aiken
c) Pascaline	(iii) China
d) Analytical Engine	(iv) Blaise Pascal
e) Census Machine	(v) Sir John Napier
f) Harvard Mark – I	(vi) Eckert & Mauchly
g) UNIVAC	(vii) Herman Hollerith

3. How does a computer get affected with Viruses . What precautions or measure can you take to save the computer from these viruses attack and name any two Antivirus.

4. Take the help of an example and write the steps to search information in Google Chrome.

5. Robots are the part of fifth generation computers. They are being used at many places. Find out at least four such places where Robots are used and mention the work they are doing ?

Sanskrit

- अपनी पाठ्यपुस्तक संस्कृतमित्रम् के पाठ-वंदना, 9, 2, 3 में कराया गया संपूर्ण कार्य लिखकर याद करो।
- हस् धातु का लट् तथा लृट् लकार में रूप लिखो और याद करो।
- 9 से 20 तक की गिनती संस्कृत शब्दों में लिखकर याद करो।

9. वर्णों को जोड़कर शब्द बनाओ-

(क) आ + म् + र् + अ + म् =

(ख) र् + ए + ल् + अ + य् + आ + न् + अ + म् =

(ग) प् + इ + प् + ई + ल् + इ + क् + आ =

(घ) म् + ऊ + ष् + अ + क् + अः =

2. कोष्ठक में दिए गए शब्दों को लिंग के अनुसार अलग करके लिखो।

उष्ट्रः, दुग्धम्, नौका, अजा, द्वारम्, मक्षिका,

बिडालः, पत्रम्, मेघः

पुल्लिंगम्

स्त्रीलिंगम्

नपुंसकलिंगम्

3. चित्र देखकर संस्कृत शब्द लिखो।





HAPPY
SUMMER
HOLIDAYS

